



香港資優數學協會
HONG KONG GIFTED
MATHEMATICS ASSOCIATION


第十五屆香港數學挑戰賽

The 15th Hong Kong Mathematics Challenge

幼稚園K3組 試題參考樣本

1. 筆盒內共有多少支鉛筆？

How many pencils are placed inside the pencil case?



A. 4


B. 3

C. 2

D. 1

2. 下圖哪個水果在右面？

In the picture below, which fruit is on the right?

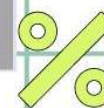

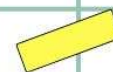



A. 

B. 

C. 

D. 




3. 女孩的左手拿着什麼東西？
What is the girl holding in her left hand?



A. 

B. 

C. 

D. 

4. 以下哪一個答案中，每個數字都是單數？
Which of the following answers is odd numbers?

A. 8, 10, 12

B. 5, 6, 7

C. 13, 18, 19

D. 3, 15, 17

幼稚園K3組-試題參考樣本

答案

1. C

2. A

3. D

4. D



請即上

www.hkgmc.org

立即報名！