



香港資優數學協會
HONG KONG GIFTED
MATHEMATICS ASSOCIATION


第十二屆香港數學挑戰賽

The 12th Hong Kong Mathematics Challenge

幼稚園K2組 試題參考樣本

1. 下圖有多少棵樹？

How many trees are there ?



A. 9

B. 10

C. 11

D. 12

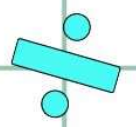
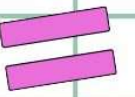
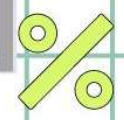

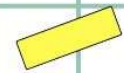
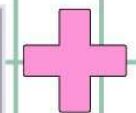
2. 水果店有5個橙、3個蘋果和2個梨子，
水果店共有幾多個水果？

A fruit shop has 5 oranges, 3
apples and 2 pears. How many
fruits are there in the fruit shop?

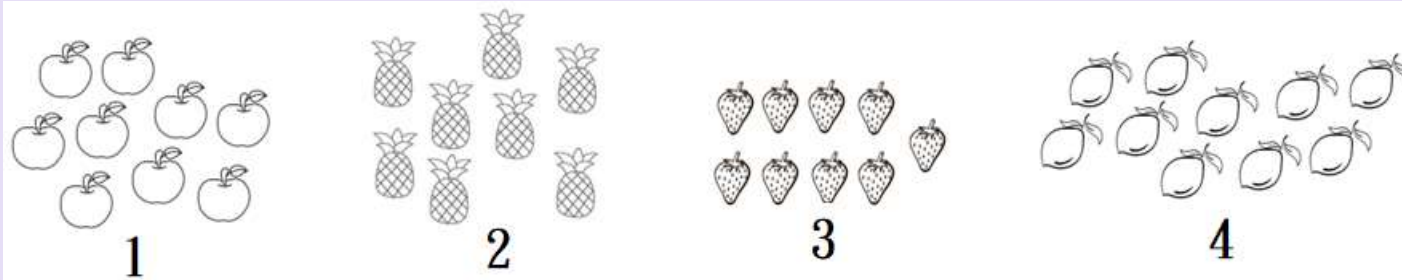
- A. 7
- B. 8
- C. 9
- D. 10

3. 以下哪一個小朋友最高？


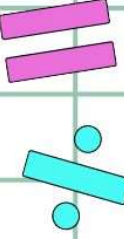
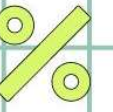

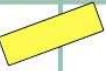
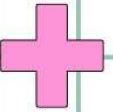
Which of the following children is the tallest?



4. 以下哪兩組水果的數量是一樣多？
Which two groups have the same number of fruits?



- A. 1, 2
- B. 3, 4
- C. 2, 4
- D. 1, 3



幼稚園K2組-試題參考樣本

答案

1. C

2. D

3. A

4. D