



香港資優數學協會
HONG KONG GIFTED
MATHEMATICS ASSOCIATION

第十二屆香港數學挑戰賽

The 12th Hong Kong Mathematics Challenge

幼稚園K3組 試題參考樣本

1. $19 - \odot = 12$, $\odot = ?$

A. 4

B. 5

C. 6

D. 7

2. 依規律，○ 內應填甚麼數字？
What is the missing number ?

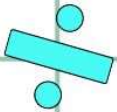
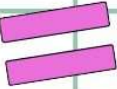
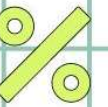

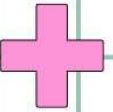
43 41 39 ○ 35

A. 34

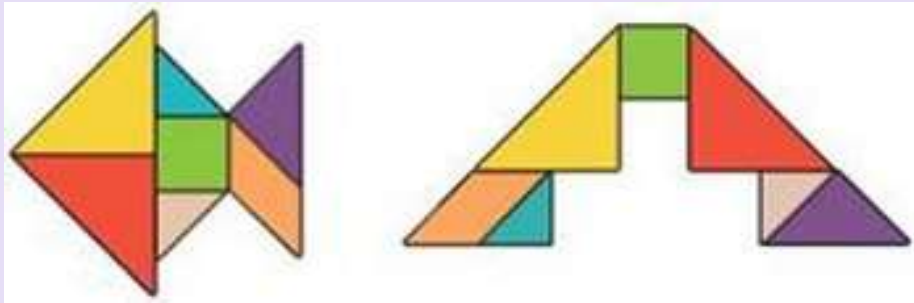
B. 40

C. 37

D. 36



3. 下圖中，正方形比三角形少多少個？
How many squares are less than triangles?

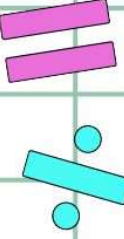
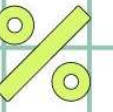

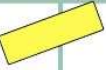
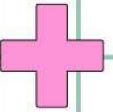


- A. 8
- B. 7
- C. 6
- D. 9

4. 根據下圖，3枝鉛筆等於幾多塊橡皮擦的長度？
 According to the picture below, how many erasers are equal to the length of 3 pencils?



- A. 3
- B. 6
- C. 8
- D. 9



幼稚園K3組-試題參考樣本

答案

1. D

2. C

3. A

4. D