


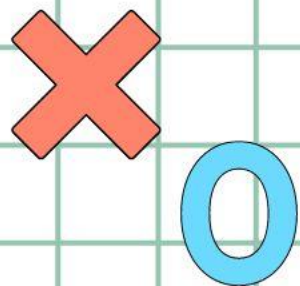


香港資優數學協會
HONG KONG GIFTED
MATHEMATICS ASSOCIATION

第十三屆香港數學挑戰賽

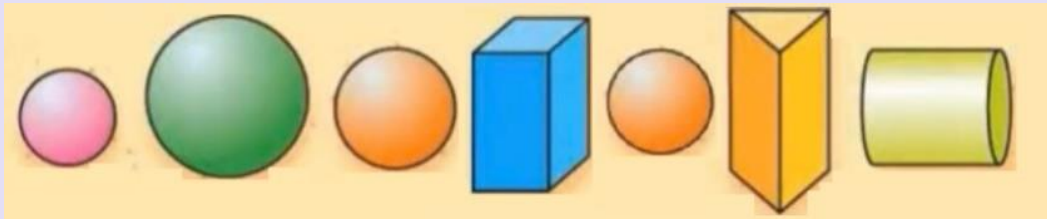
The 13th Hong Kong Mathematics Challenge

幼稚園K2組 試題參考樣本



1. 以下有多少個球體？

How many spheres are there?


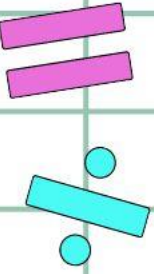
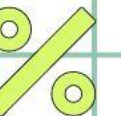




A. 3

B. 4

C. 5

D. 6





2. 以下哪一個答案正確？

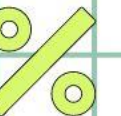

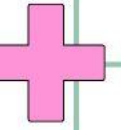
Which of the following answers is correct?

A. 4 比 3 小 (4 is less than 3)

B. 7 比 5 小 (7 is less than 5)

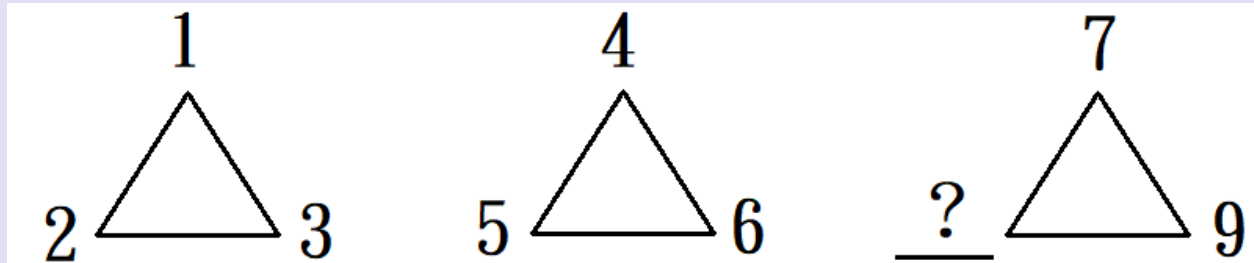
C. 8 比 5 大 (8 is more than 5)

D. 2 比 4 大 (2 is more than 4)



3. 依規律，橫線上的數字是？

What is the missing number?




A. 6

B. 8

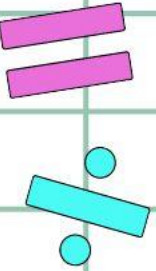
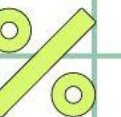
C. 10

D. 12

4. 以下哪兩張貼紙的長度是一樣？
Which of the following two stickers are the same length?



- A. 1, 2
- B. 3, 4
- C. 2, 4
- D. 1, 3



幼稚園K2組-試題參考樣本

答案

1. B

2. C

3. B

4. C