



香港資優數學協會
HONG KONG GIFTED
MATHEMATICS ASSOCIATION

第十三屆香港數學挑戰賽

The 13th Hong Kong Mathematics Challenge

小學P1組 試題參考樣本

1. 根據規律，空格上的數字是多少？
What is the missing number?

12	7	5	9	4	5	13		8
----	---	---	---	---	---	----	--	---

- A. 10
B. 9
C. 6
D. 5

2. 數字 2 和 18 之間，共有多少個單數？

Between the numbers 2 and 18, how many odd numbers are there?

A. 6

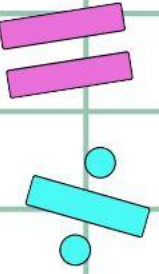

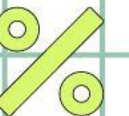

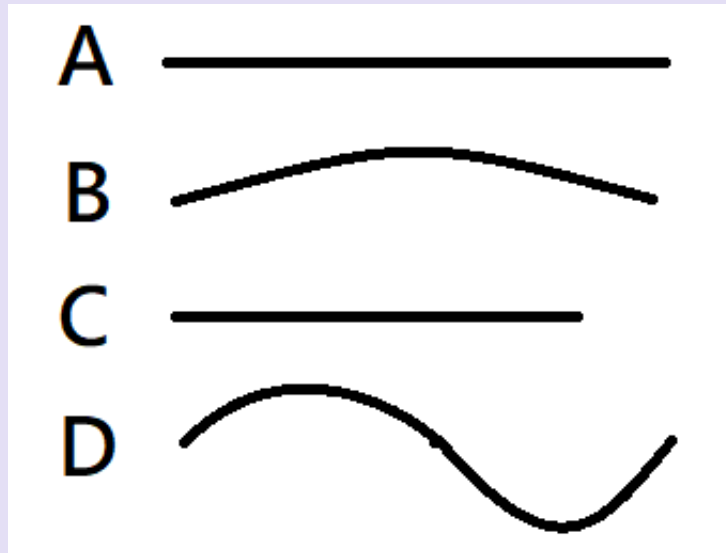
B. 7

C. 8

D. 9

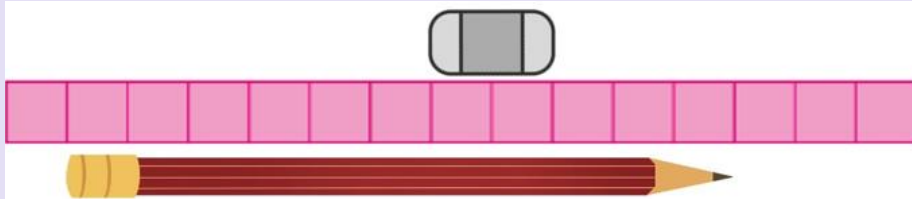
3. 下圖中，哪一條線最長？

In the picture below, which line is the longest?



4. 鉛筆比橡皮擦長多少個  ?

How many  is the pencil longer than the eraser?



A. 9

B. 8

C. 7

D. 6

小學P1組-試題參考樣本

答案

1. D

2. C

3. D

4. A