



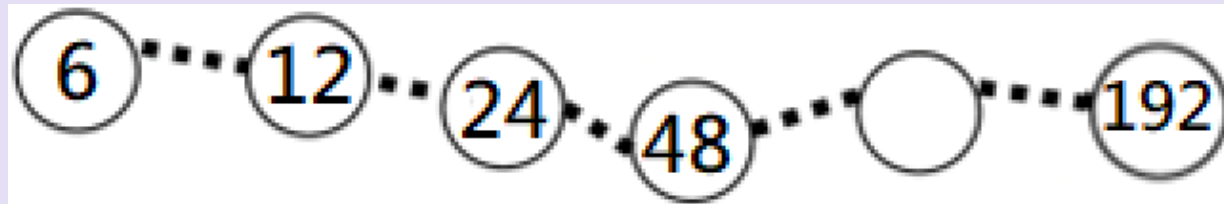
香港資優數學協會
HONG KONG GIFTED
MATHEMATICS ASSOCIATION

第十三屆香港數學挑戰賽

The 13th Hong Kong Mathematics Challenge

小學P2組 試題參考樣本

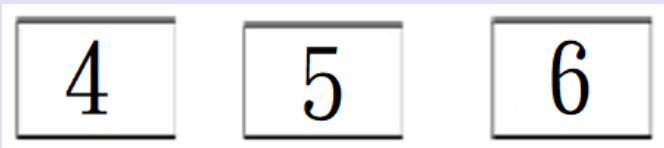
1. 根據規律，圓圈內的數字是多少？
What is the missing number?



- A. 86
B. 106
C. 116
D. 96

2. 把任意兩張數字卡相乘，共可得到多少個不同的結果？

How many different results can be obtained by multiplying any two of the cards?



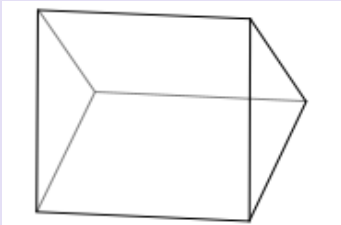
A. 2

B. 3

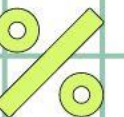
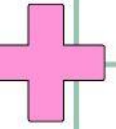
C. 4

D. 5

3. 下圖的立體圖形共有多少個面？
How many faces are there in the 3-D shape shown below?



- A. 2
B. 3
C. 4
D. 5



4. 一部電影長112分鐘，它於下午1時42分播放完畢，電影在何時開始播放？

A movie is 112 minutes long. It finished playing at 1:42 pm. When was the movie started?

- A. 3:34 pm
- B. 11:50 am
- C. 11:50 pm
- D. 12:10 pm

小學P2組-試題參考樣本

答案

1. D

2. B

3. D

4. B