


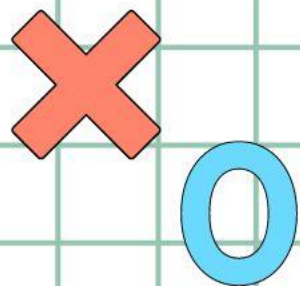


香港資優數學協會  
HONG KONG GIFTED  
MATHEMATICS ASSOCIATION

# 第十三屆香港數學挑戰賽

The 13<sup>th</sup> Hong Kong Mathematics Challenge

小學P3組 試題參考樣本



1. 爸爸每天給琳琳92元，7星期後，爸爸共給了琳琳多少元？

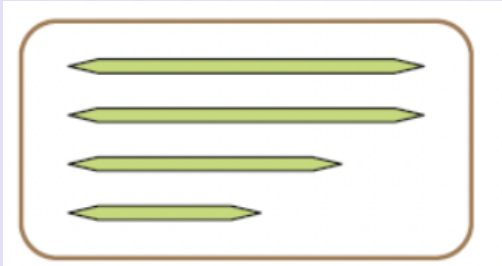
Dad gives Lam Lam \$92 a day. After 7 weeks, how much has Dad given to Lam Lam?

- A. \$644
- B. \$4416
- C. \$4508
- D. \$4492

2. 一條長9米的絲帶，每6厘米分成一段，共可分成多少段？  
A 9m ribbon is divided into segments every 6cm.  
How many segments can it be divided?

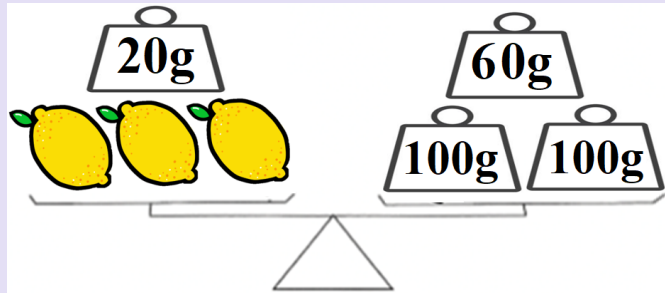
- A. 250
- B. 150
- C. 151
- D. 2

3. 運用下圖竹籤可拼砌出哪一個圖形？  
Which of the following figures can be built using the bamboo sticks in the figure below?



- A. 長方形 (Rectangle)
- B. 正方形 (Square)
- C. 五邊形 (Pentagon)
- D. 梯形 (Trapezoid)

4. 下圖中，一個檸檬的重量是多少？  
 What is the weight of a lemon in the picture below?



- A. 60 g  
 B. 70 g  
 C. 80 g  
 D. 90 g

# 小學P3組-試題參考樣本

## 答案

1. C

2. B

3. D

4. C