


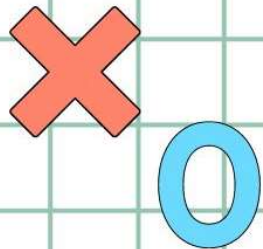


香港資優數學協會
HONG KONG GIFTED
MATHEMATICS ASSOCIATION

第十四屆香港數學挑戰賽

The 14th Hong Kong Mathematics Challenge

幼稚園K3組 試題參考樣本



1. 以下哪一個數比 16 大但又比 28 小？
Which number is greater than 16 but less than 28?

A. 15

B. 29

C. 19

D. 6

2. 以下時鐘顯示的時間是甚麼？
What is the time?



- A. 6 時半 (half past six)
- B. 7 時半 (half past seven)
- C. 8 時半 (half past eight)
- D. 6 時 (six o'clock)

3. 雞髀 18 隻，吃去 12 隻，還餘多少隻？

There are 18 chicken thighs, 12 are eaten. How many are left?

A. 8

B. 6

C. 4


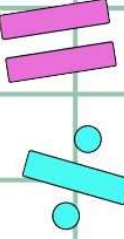
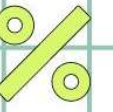

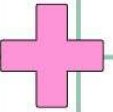
D. 2

4. 下圖是弟弟有的錢幣，他共有多少元？

The picture below shows the coins that brother has. How many dollars does he have in total?



- A. \$8
- B. \$15
- C. \$18
- D. \$20



幼稚園K3組-試題參考樣本

答案

1. C

2. B

3. B

4. C