



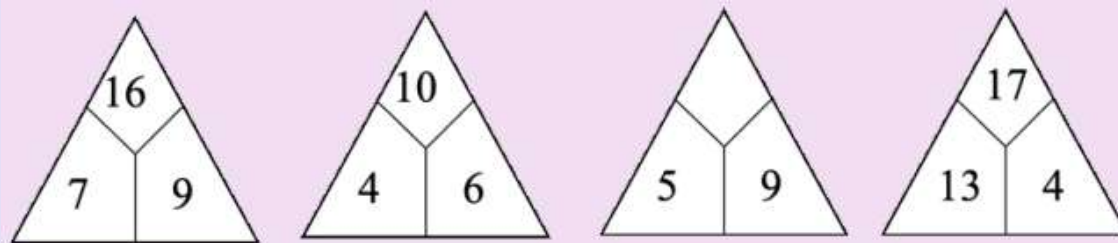
香港資優數學協會
HONG KONG GIFTED
MATHEMATICS ASSOCIATION

第十四屆香港數學挑戰賽

The 14th Hong Kong Mathematics Challenge


小學P1組 試題參考樣本

1. 根據規律，空格上的數字是多少？
What is the missing number?



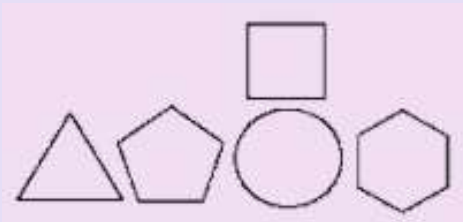
- A. 12
- B. 14
- C. 16
- D. 18

2. 把以下繩子由長至短排列，繩子 w 排第 ___。
- Arrange the following ropes from longest to shortest, rope w ranked ___.



- A. 5
- B. 4
- C. 3
- D. 2

3. 下圖中，五邊形的左面是甚麼圖形？
What is the shape on the left of the pentagon?



- A. 六邊形 Hexagon
B. 圓形 Circle
C. 三角形 Triangle
D. 四邊形 Quadrilateral

4. 鉛筆長18cm，每個萬字夾的長度是？

The length of a pencil is 18cm. What is the length of each paper clip?



A. 2

B. 3

C. 4

D. 5

小學P1組-試題參考樣本

答案

1. B

2. C

3. C

4. B