



香港資優數學協會  
HONG KONG GIFTED  
MATHEMATICS ASSOCIATION

# 第十四屆香港數學挑戰賽

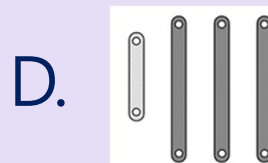
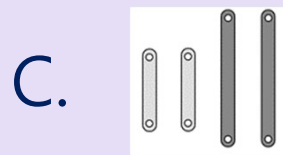

The 14<sup>th</sup> Hong Kong Mathematics Challenge

小學P3組 試題參考樣本

1. 由8月3日至9月26日，共有多少天？  
How many days are there from 3rd August to 26th September?

- A. 53
- B. 54
- C. 55
- D. 56

2. 以下各組幾何條，哪一組能製作出平行四邊形？  
Which of the following groups of geometric strips can make a parallelogram?

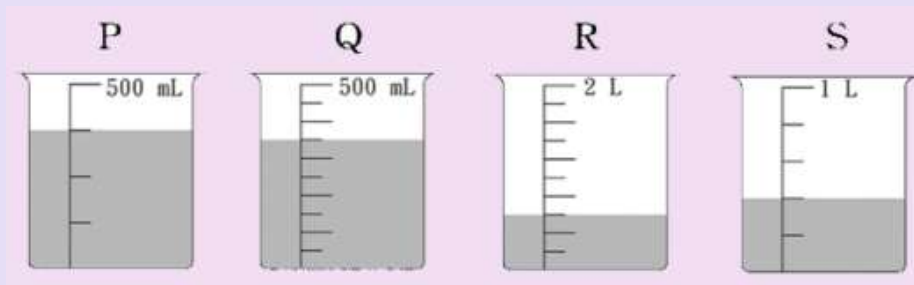


3. 雞蛋每盒有半打，超市有雞蛋121盒，今天售出85盒後，還餘雞蛋多少隻？

There are half a dozen of eggs in each box.  
Supermarket has 121 boxes of eggs. How many eggs remain after 85 boxes of eggs are sold?

- A. 180
- B. 196
- C. 205
- D. 216

4. 下列哪個量杯的水多於450毫升？  
Which of the following measuring cup contains more than 450 mL water?



- A. P
- B. Q
- C. R
- D. S

# 小學P3組-試題參考樣本

## 答案

1. C

2. C

3. D

4. C