






香港資優數學協會  
HONG KONG GIFTED  
MATHEMATICS ASSOCIATION

# 第十屆香港數學挑戰賽

The 10th Hong Kong Mathematics Challenge

幼稚園K3組 試題參考樣本

1.  +  = 20,  = ?

A. 8

B. 9

C. 10

D. 20

2. 雞髀15隻，吃去13隻，還餘多少隻？

There are 15 chicken thighs, 13 are eaten. How many are left?

A. 8

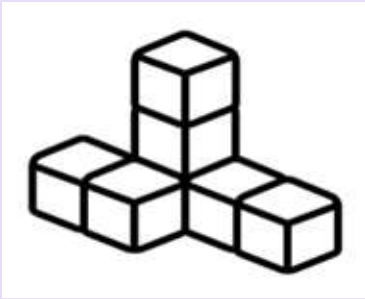
B. 6

C. 4

D. 2

3. 要多少塊積木才可以砌到下圖？

How many blocks are needed to build the picture below?




A. 5

B. 6

C. 7

D. 8

4. 依規律，☆內應填甚麼數字？  
What is the missing number ?



- A. 29
- B. 28
- C. 27
- D. 25

# 幼稚園K3組-試題參考樣本

## 答案

1. C

2. D

3. C

4. B