



香港資優數學協會
HONG KONG GIFTED
MATHEMATICS ASSOCIATION

第十屆香港數學挑戰賽

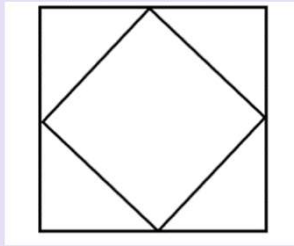
The 10th Hong Kong Mathematics Challenge

小學P3組 試題參考樣本


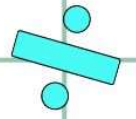
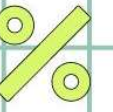

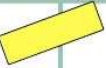

1. 每本科學書厚27mm，把9本疊起來會有多厚？
Each science book is 27mm thick. What is the total thickness if 9 books are stacked?

- A. 23.5cm
- B. 24.3cm
- C. 235cm
- D. 243cm

2. 下圖中共有多少個直角？
How many right angles are there?



- A. 4
- B. 8
- C. 12
- D. 16



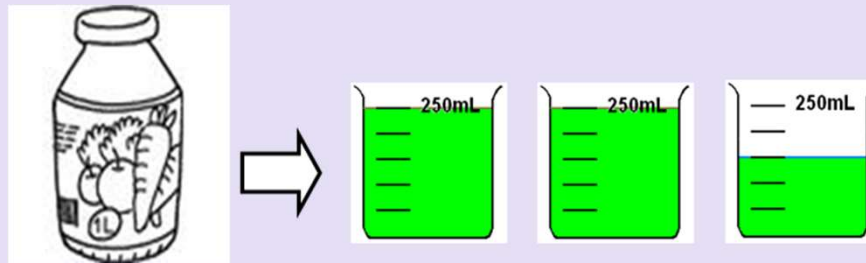
3. 根據規律，在括號內填的數字是甚麼？
What is the missing number?

4 , **9** , **19** , **39** , **79** , ()

- A. 99
- B. 159
- C. 169
- D. 199

4. 把果汁倒進量杯內，結果如下，這瓶果汁的容量是____mL。

After putting the juice into the measuring cup, the result is as follows. This bottle of juice is ____ mL.



- A. 625
- B. 640
- C. 650
- D. 660

小學P3組-試題參考樣本

答案

1. B

2. B

3. B

4. C