


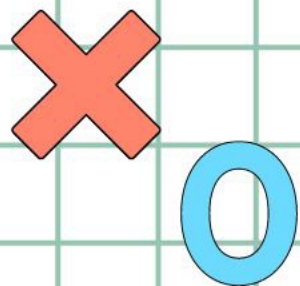


香港資優數學協會
HONG KONG GIFTED
MATHEMATICS ASSOCIATION

第九屆香港數學挑戰賽


The 9th Hong Kong Mathematics Challenge

幼稚園K2組 試題參考樣本



1. 下圖小貓比小狗多幾多隻？

How many more kittens are there than puppies?

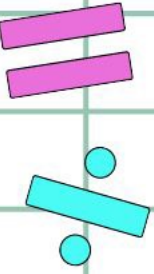


A. 4

B. 3


C. 2

D. 1



2. 小白兔排在第幾位？

Which place is the little rabbit in the line?



A. 6


B. 4





C. 3

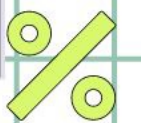

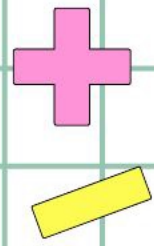
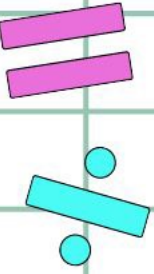
D. 5

3. 依規律，橫線上的圖案是甚麼？

What is the missing pattern?

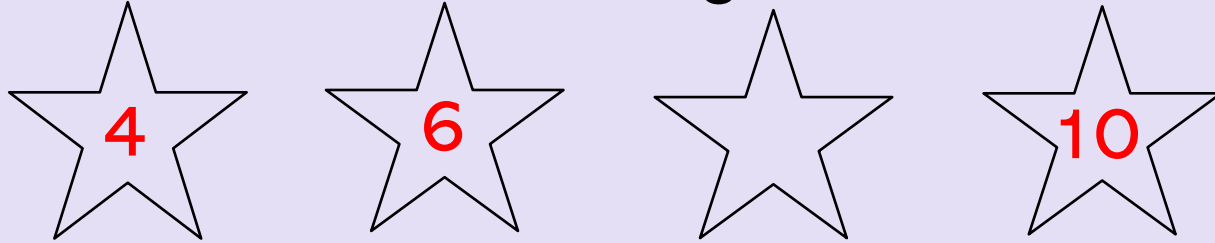


- A. 
- B. 
- C. 
- D. 



4. 依規律，☆內應填甚麼數字？

What is the missing number ?

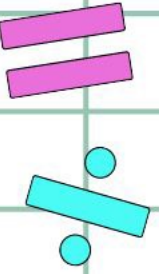
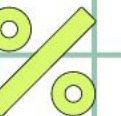


A. 2

B. 7

C. 8

D. 9



幼稚園K2組-試題參考樣本

答案

1. D

2. B

3. B

4. C