


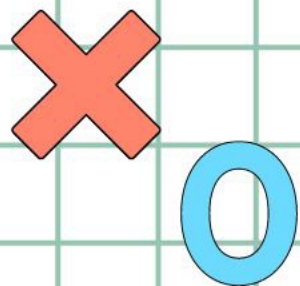


香港資優數學協會
HONG KONG GIFTED
MATHEMATICS ASSOCIATION

第九屆香港數學挑戰賽

The 9th Hong Kong Mathematics Challenge

幼稚園K3組 試題參考樣本



1. $\star + 5 = 9$, $\star = ?$

A. 4

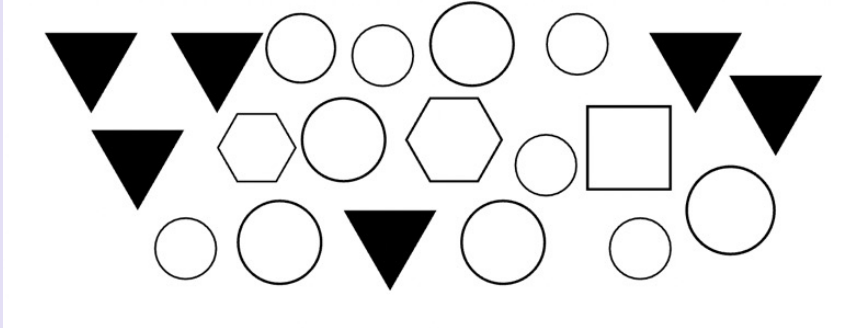
B. 5

C. 7

D. 6

2. 下圖共有多少個圓形？

How many circles are there in the picture below?

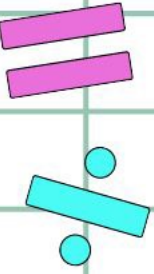


A. 20

B. 14

C. 13

D. 11



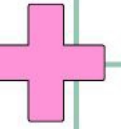
3. $2 + 1 + 3 = ?$

A. 3

B. 4


C. 5

D. 6



4. 依規律，☆內應填甚麼數字？

What is the missing number ?

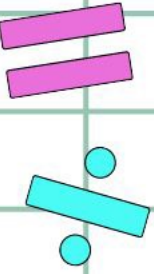
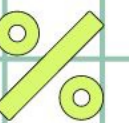


A. 29

B. 28

C. 27

D. 25



幼稚園K3組-試題參考樣本

答案

1. A

2. D

3. D

4. B