


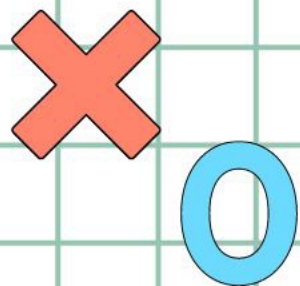



香港資優數學協會
HONG KONG GIFTED
MATHEMATICS ASSOCIATION

第九屆香港數學挑戰賽

The 9th Hong Kong Mathematics Challenge

小學P2組 試題參考樣本





1. $\text{apple} \times 9 = 72$, $\text{apple} = ?$

A. 8

B. 9

C. 13

D. 14



2. 利用以下三張數卡組成最小的三位雙數是甚麼？

What is the smallest three-digit even number by using the following three number cards?

2

0

9

A. 209

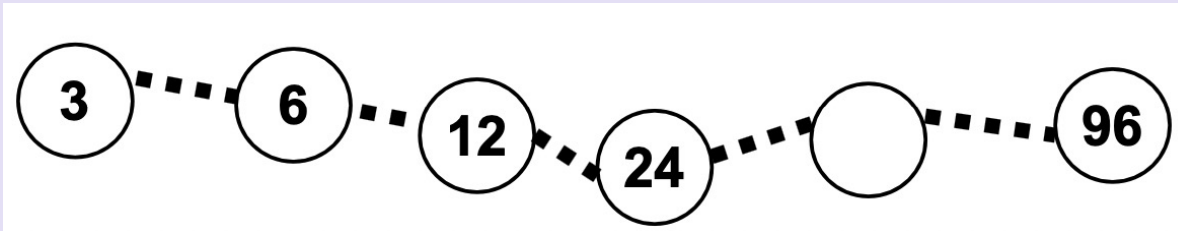
B. 902

C. 290

D. 920

3. 根據規律，橫線上的數字是多少？

What is the missing number?



A. 32

B. 34

C. 36

D. 48

4. 祖母在家做餃子，她每10分鐘可做6個餃子，她一小時可做多少個餃子？

Grandmother makes dumplings at home. She can make 6 dumplings every 10 minutes. How many dumplings can she make in one hour?

- A. 6
- B. 24
- C. 30
- D. 36

小學P2組-試題參考樣本

答案

1. A

2. C

3. D

4. D